

# Unit 9 Test

---



Student Name: \_\_\_\_\_

Write the past tense form of the following verbs:

Verbs	Past Tense	Verbs	Past Tense
1. to be	_____	11. to have	_____
2. to bring	_____	12. to laugh	_____
3. can	_____	13. to make	_____
4. to clean	_____	14. to put	_____
5. to come	_____	15. to run	_____
6. to do	_____	16. to say	_____
7. to eat	_____	17. to see	_____
8. to give	_____	18. to take	_____
9. to throw	_____	19. to talk	_____
10. to go	_____	20. to write	_____

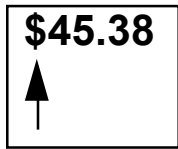
Use 3 of the verbs above in past tense sentences.

21. \_\_\_\_\_
22. \_\_\_\_\_
23. \_\_\_\_\_



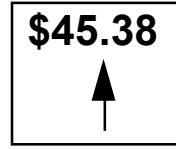
24. What is this? \_\_\_\_\_ 25. What is this? \_\_\_\_\_
26. Circle the numbers that represent dollars. **\$45.38**
27. Circle the numbers that represent cents. **\$45.38**

# Unit 9 Test (continued)



28.

28. What is this? \_\_\_\_\_




29.

29. What is this? \_\_\_\_\_



30. How much money is here?

\_\_\_\_\_



31. How much money does he have?

\_\_\_\_\_

Which bills and coins could you use to make the following amounts of money?

32. \$47.78

33. \$2.94

34. \$172.30

35. \$0.86

36. \$99.99

32. \_\_\_\_\_

33. \_\_\_\_\_

34. \_\_\_\_\_

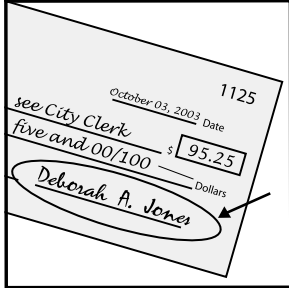
35. \_\_\_\_\_

36. \_\_\_\_\_

# Unit 9 Test (continued)

Label the following items using the words in the box below.

withdrawal check ATM checkbook teller deposit checkbook customer




37. \_\_\_\_\_



38. \_\_\_\_\_



39. \_\_\_\_\_



40. \_\_\_\_\_



41. \_\_\_\_\_



42. \_\_\_\_\_



43. \_\_\_\_\_



44. \_\_\_\_\_

45. Write a check to Wong Foods for \$54.87.

English Student 523 Spruce St Baker, CA 94018 (650) 555-5162 1125

\_\_\_\_\_ Date

PAY TO THE ORDER OF \_\_\_\_\_ \$

\_\_\_\_\_ Dollars

For \_\_\_\_\_

46. Write a check for \$261.99 to Digital Education Productions.

English Student 523 Spruce St Baker, CA 94018 (650) 555-5162 1126

\_\_\_\_\_ Date

PAY TO THE ORDER OF \_\_\_\_\_ \$

\_\_\_\_\_ Dollars

For \_\_\_\_\_

## Unit 9 Test (continued)

Fill out the check register below based on the two checks written above.  
47-48.

Trans.Type	Date	Description of Transaction	Payment/	Deposit/	\$ Balance
					\$762.73

For the following scenarios, decide if the practice is good banking or bad banking.  
Circle the correct answer.

49. A man has a balance of \$155.38 in his savings account, and \$75.00 in his checking account. He withdraws \$50.00 in cash from his checking account and writes a check for his phone bill for \$31.75. **good banking / bad banking**

50. You write the PIN for your ATM card on the back of the card. **good banking / bad banking**

51. You have \$512.81 in your savings account. You wire \$250.00 from your savings account to your brother's bank account in El Salvador. **good banking / bad banking**

52. You open a new checking account with \$1110.28, and a new savings account with \$150.00. You transfer \$450.00 from your checking account to your savings account, and write a check for \$725.00 for rent. **good banking / bad banking**

53. A man deposits \$628.34 into his checking account, which makes his balance \$1046.08. He writes a check for his phone bill, \$67.72, his electric bill, \$58.81, and his cable TV bill, \$33.78. After that, he wires \$700.00 to his sister's bank account in China. Finally, he transfers \$144.41 from his checking account to his savings account. **good banking / bad banking**

54. What is the ending balance of the man's savings account in #45? \_\_\_\_\_

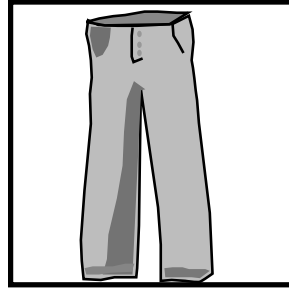
---

# Unit 9 Test (continued)

Label the following items.



55. \_\_\_\_\_




56. \_\_\_\_\_



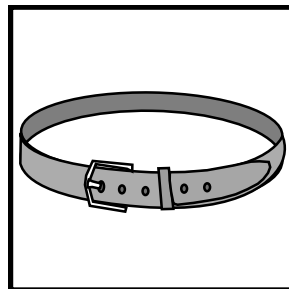
57. \_\_\_\_\_




58. \_\_\_\_\_




59. \_\_\_\_\_




60. \_\_\_\_\_



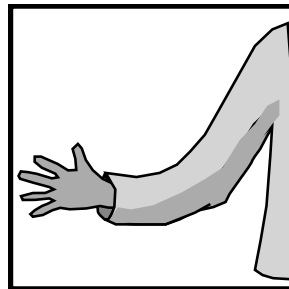
61. \_\_\_\_\_




62. \_\_\_\_\_




63. \_\_\_\_\_



64. \_\_\_\_\_




65. \_\_\_\_\_




66. \_\_\_\_\_


Draw the following items.




67. skirt



68. hat





69. gloves



70. jewelry

## Unit 9 Test (continued)

---



71. tie

72. boots

Answer the following questions with complete sentences.

73. What are you wearing? \_\_\_\_\_  
\_\_\_\_\_

74. What kinds of clothes do you like? \_\_\_\_\_  
\_\_\_\_\_

A sweater that you like is on sale at the store for 15% off. It normally costs \$40.00.

75. How much money does the sweater cost with 7% sales tax? \_\_\_\_\_  
\_\_\_\_\_

76. How much money do you save off of the regular price? \_\_\_\_\_  
\_\_\_\_\_

A pair of jeans normally costs \$43.00. The store is having a sale on jeans. You can buy three for the price of two.

77. How much do three pairs cost with 8% sales tax? \_\_\_\_\_  
\_\_\_\_\_

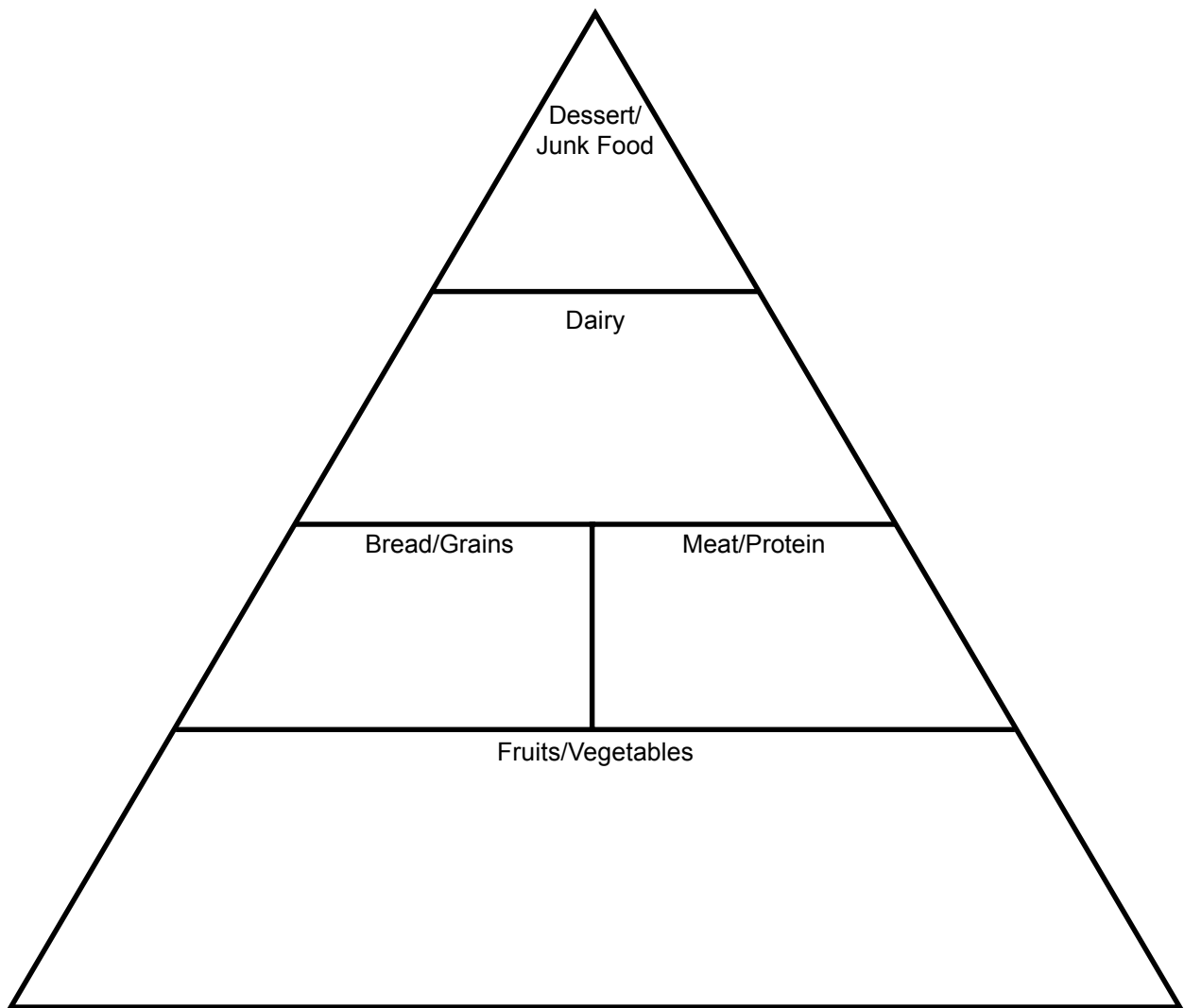
78. How much do you save off of the regular price? \_\_\_\_\_  
\_\_\_\_\_

# Unit 9 Test (continued)

---


Put the following foods into their appropriate category in the pyramid.  
79-95.

lamb	lettuce	beef	peas	bananas	chocolate	yogurt
pasta	crackers	grapes	pie	carrots	chicken	fish
cheese	cereal	milk				




# Unit 9 Test (continued)


Label the following food items.




96. \_\_\_\_\_




97. \_\_\_\_\_



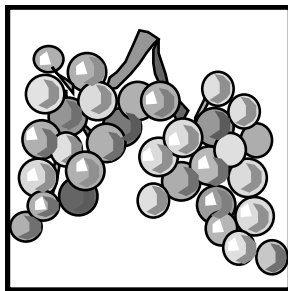
98. \_\_\_\_\_




99. \_\_\_\_\_




100. \_\_\_\_\_




101. \_\_\_\_\_




102. \_\_\_\_\_




103. \_\_\_\_\_




104. \_\_\_\_\_




105. \_\_\_\_\_




106. \_\_\_\_\_




107. \_\_\_\_\_




108. \_\_\_\_\_



109. \_\_\_\_\_




110. \_\_\_\_\_




111. \_\_\_\_\_


## Unit 9 Test (continued)




112. \_\_\_\_\_



113. \_\_\_\_\_



114. \_\_\_\_\_



115. \_\_\_\_\_

Decide if the following things are wants or needs. Circle the correct answer.

116. a new car **need or want**

117. clothing **need or want**

118. 2 new pairs of shoes **need or want**

119. fruits and vegetables **need or want**

120. cake **need or want**

121. a sweater in the cold **need or want**

122. water **need or want**

123. 3 hats **need or want**

124. money **need or want**

Write two things that you need. (can't be things from above)

125. \_\_\_\_\_

126. \_\_\_\_\_

Write two things that you want. (can't be things from above)

127. \_\_\_\_\_

128. \_\_\_\_\_

Answer the following questions in complete sentences.

129. What do you like to do? \_\_\_\_\_

\_\_\_\_\_

## Unit 9 Test (continued)

---

130. Do you like to dance? \_\_\_\_\_

131. Do you like to sleep? \_\_\_\_\_

132. Do you like to cook? \_\_\_\_\_

133. What don't you like to do? \_\_\_\_\_

---